

**Write an expression to model each situation, then find the solution.**

1. The retail price of a book is \$29.99. Amazon is selling it for a 17% discount.
2. Dinner cost \$38.50. You decide to leave a 15% tip.
3. You bought a Nintendo Switch for \$306.75. You sold it for a 20% loss.
4. You design a sign for your yard sale. It is 15" tall. You decide to increase it by 40%.
5. Best buy is selling a video game for 20% off \$55. You also have a 10% discount card. Would you rather they take 30% off the original price, or should they first take 20% off, then 10% off that price? Explain your choice.

**Write an expression to model each situation, then find the solution.**

1. The retail price of a book is \$29.99. Amazon is selling it for a 17% discount.
2. Dinner cost \$38.50. You decide to leave a 15% tip.
3. You bought a Nintendo Switch for \$306.75. You sold it for a 20% loss.
4. You design a sign for your yard sale. It is 15" tall. You decide to increase it by 40%.
5. Best buy is selling a video game for 20% off \$55. You also have a 10% discount card. Would you rather they take 30% off the original price, or should they first take 20% off, then 10% off that price? Explain your choice.

**Write an explicit equation to represent each pattern below.  
Write your equation in two equivalent forms.**

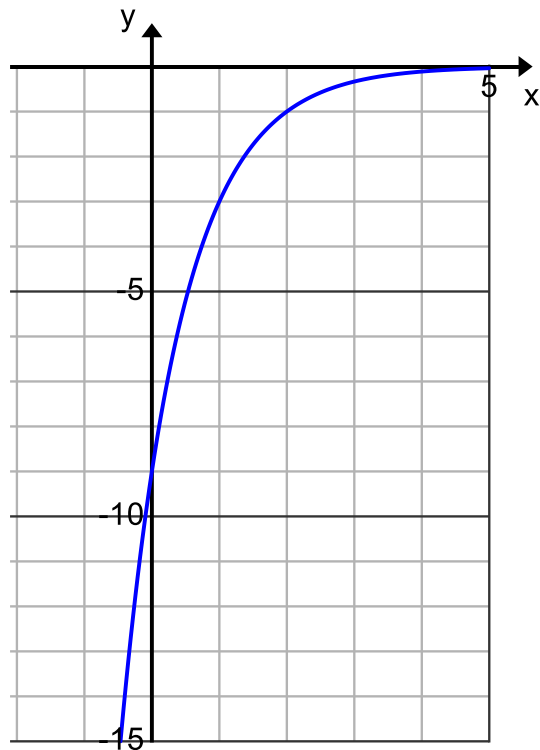
6. The water in a pool is slowly evaporating. It starts with 300 gallons. After a week there is 120 gallons, after weeks two and three there are 48 and 19.2 gallons.

b. How much will there be after 5 weeks?

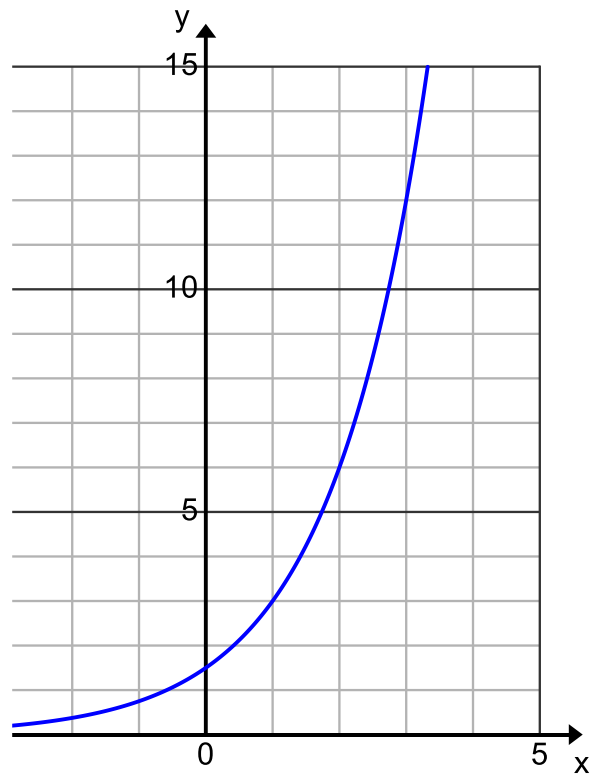
7. A population of mosquitos triple every 4 days. They started with 17 mosquitos.

b. How many will there be after 19 days?

8.



9.



$-9\left(\frac{1}{3}\right)^x$	24.89	3.07	$\frac{3}{2}(2)^x$	44.28
245.4	21	38.5	31.38.88	

**Write an explicit equation to represent each pattern below.**

**Write your equation in two equivalent forms.**

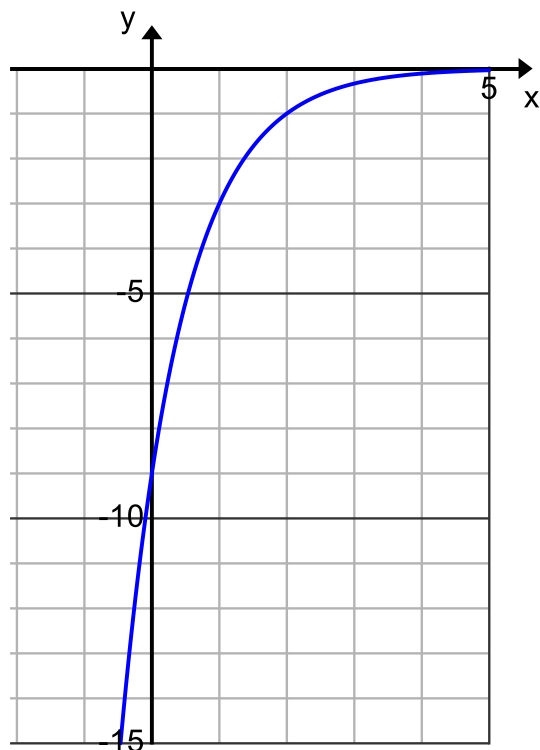
10. The water in a pool is slowly evaporating. It starts with 300 gallons. After a week there is 120 gallons, after weeks two and three there are 48 and 19.2 gallons.

b. How much will there be after 5 weeks?

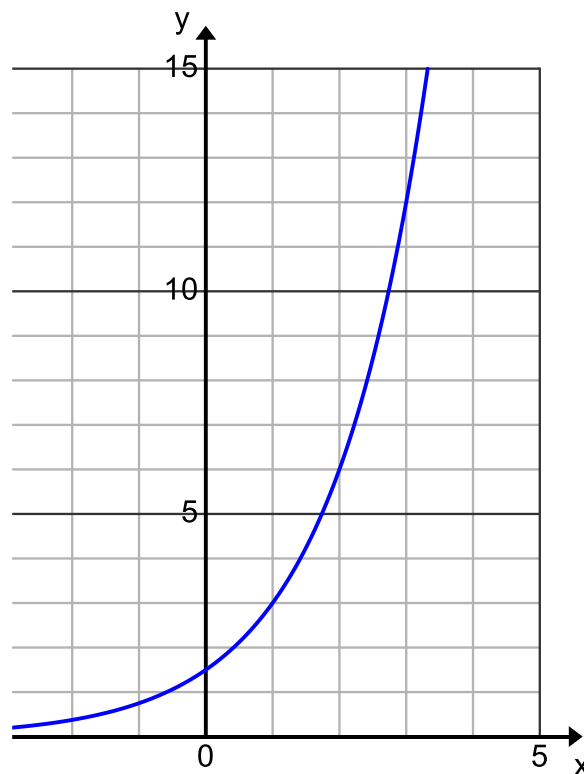
11. A population of mosquitos triple every 4 days. They started with 17 mosquitos.

b. How many will there be after 19 days?

12.



13.



$-9\left(\frac{1}{3}\right)^x$	24.89	3.07	$\frac{3}{2}(2)^x$	44.28
245.4	21	38.5	31.38.88	

